

















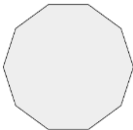
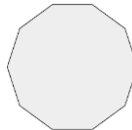


## PROBLEMI CON IMMAGINI E MOLTIPLICAZIONI

Osserva e risolvi con la moltiplicazione

1		→	4	foglie	5		$4 \times 5$	20	foglie
1		→		candele	4		$\dots \times \dots$		candele
1		→		ruote	7		$\dots \times \dots$		ruote
1		→		occhi	8		$\dots \times \dots$		occhi
1		→		zampe	4		$\dots \times \dots$		zampe
1		→		petali	9		$\dots \times \dots$		petali
1		→		zampe	6		$\dots \times \dots$		zampe
1		→		coda	10		$\dots \times \dots$		code
1		→		quadri	2		$\dots \times \dots$		quadri
1		→		lati	3		$\dots \times \dots$		lati