


LA CASA DEL NUMERO 10

OSSERVA LE FINESTRE SPENTE E ACCESE .


COMPLETA LE COLONNE A FIANCO CON I NUMERI CORRISPONDENTI.




	+		=
	+		=
	+		=
	+		=
	+		=
	+		=
	+		=
	+		=
	+		=
	+		=

Colonne complete

	+		=	10
0	+	10	=	10
1	+	9	=	10
2	+	8	=	10
3	+	7	=	10
4	+	6	=	10
5	+	5	=	10
6	+	4	=	10
7	+	3	=	10
8	+	2	=	10
9	+	1	=	10
10	+	0	=	10



Colonne completate



■	□	

■	□	
1	9	= 10
7	3	= 10
9	1	= 10
2	8	= 10
0	10	= 10
6	4	= 10
10	0	= 10
3	7	= 10
5	5	= 10
8	2	= 10
4	6	= 10

